

Class -3 A and B
Sub- Mathematics
Topic- Ch- 8 (Money)

Review of zoom class on 12-9-2020

Started new chapter. Explained the boys about the coins and currency notes used in our daily life., How to add coins and rupees , how to write in symbolic form and in rupees and paise. Did few questions in the class




H. W

Ex- 8.1 (Q 1,2,3,and 4) in the book. Pg -97, 98



Please check your answers




Exercise 8.1

1. Express the these notes in ₹ total.

(a)  +  +  = ₹ 620
 $500 + 100 + 20$




(b)  +  +  = ₹ 170
 $100 + 50 + 20$



(c)  +  +  = ₹ 2600
 $2000 + 500 + 100$



(d)  +  +  = ₹ 700
 $100 + 100 + 500$

2. Add the following coin and write in form of money.

(a)  +  +  = ₹ 8
 $5 + 2 + 1$

(b)  +  +  = ₹ 25
 $10 + 10 + 5$

(c)  +  = ₹ 7
 $5 + 2$

(d)  +  = ₹ 15
 $10 + 5$

3. Express the following money in symbolic form.

- | | | | |
|------------------------|--------|------------------------|--------|
| (a) 50 Paise | ₹0.50 | (b) 62 Rupees 50 Paise | ₹62.50 |
| (c) 3 Rupees 5 Paise | ₹3.05 | (d) 8 Rupees 20 Paise | ₹8.20 |
| (e) 75 Paise | ₹0.75 | (f) 16 Rupees 5 Paise | ₹16.05 |
| (g) 50 Rupees 25 Paise | ₹50.25 | (h) 25 Paise | ₹0.25 |

4. Express the following in Rupees and Paise.

- | | | | |
|--------------|-------------|-------------|------------|
| (a) ₹ 7.65 | ₹ 7, 65 P | (b) ₹ 63.50 | ₹ 63, 50 P |
| (c) ₹ 102.75 | ₹ 102, 75 P | (d) ₹ 36.17 | ₹ 36, 17 P |
| (e) ₹ 0.75 | ₹ 0, 75 P | (f) ₹ 0.07 | ₹ 0, 07 P |
| (g) ₹ 3.75 | ₹ 3, 75 P | (h) ₹ 0.05 | ₹ 0, 05 P |